

3.6 Limiting and Clamping Circuits

Q:

A:

→

HO: Diode Limiters

Q:

A: HO: Steps for Analyzing Limiter Circuits

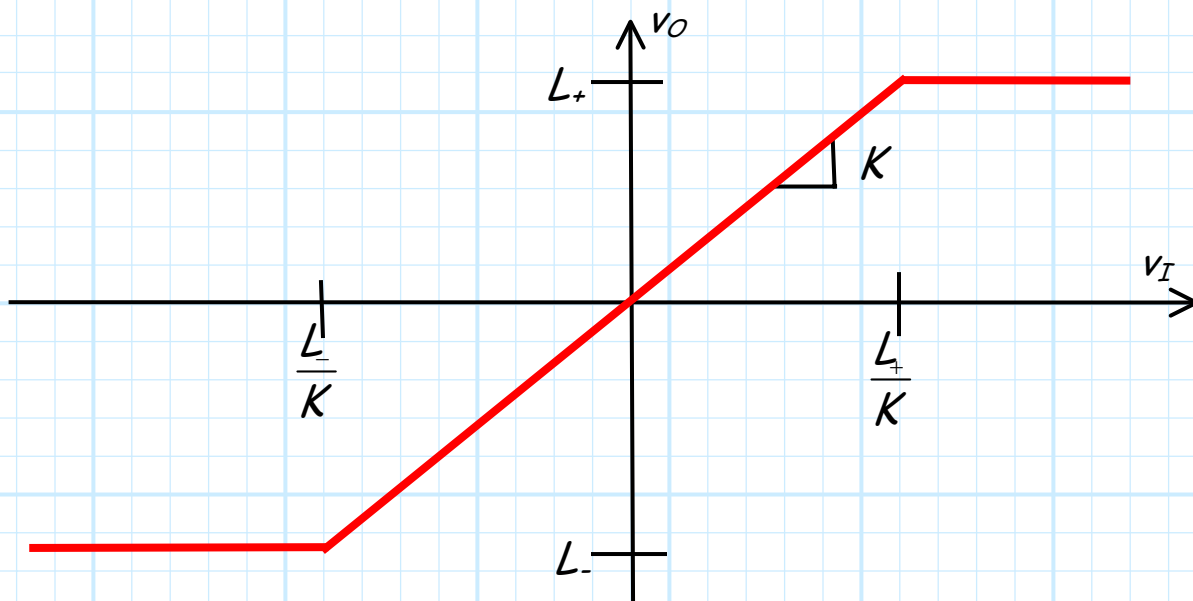
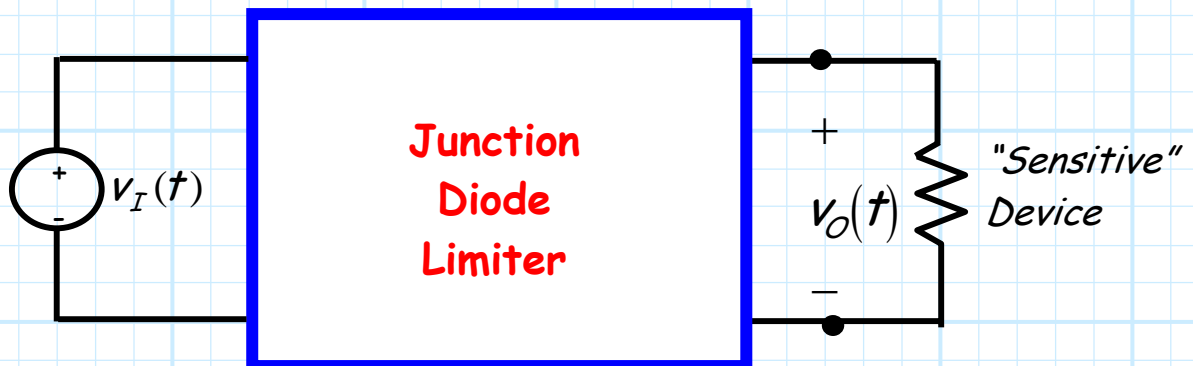
Example: A Diode Limiter

Diode Limiters

Often, a voltage source (either DC or AC) is used to supply an electronic device that is very **expensive** and/or very **sensitive**.

In this case, we may choose insert a **diode limiter** between the source and the device—this limiter will provide **over-voltage protection** !

To see how, we should first consider a typical **transfer function** for a junction diode limiter:



Note that this transfer function indicates that the **output** voltage v_o can **never** be more than a **maximum** voltage L_+ , nor less than a **minimum** voltage L_- .

Thus, the device places some **limits** on the value of the **output** voltage:

$$L_- < v_o < L_+ \quad \text{for any } v_I$$

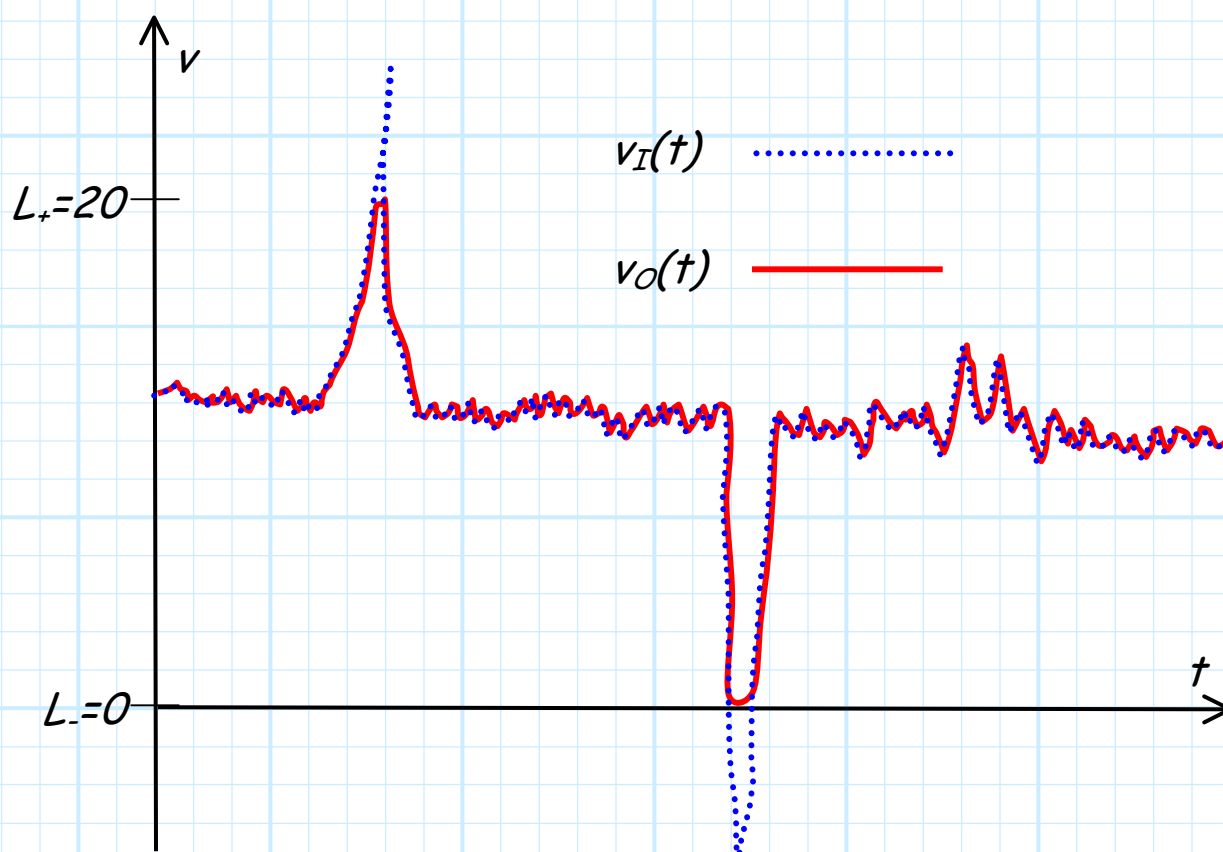
The limits L_- and L_+ provide a **safe** operating value for v_o , the voltage across our "sensitive" electronic device.

Presumably, if **no limiter** were present, we might find that $v_o > L_+$ or $v_o < L_-$, resulting in **damage** to the device!

Note although $L_+ > L_-$, the values of L_- and L_+ may be both **positive**, both **negative**, or even **zero**.

For example, a limiter with $L_- = 0$ ($L_+ = 0$) would prevent the voltage from ever becoming **negative** (positive). We find that for many devices, the **wrong** voltage **polarity** can be **destructive!**

To illustrate, let's consider an **example** input voltage $v_I(t)$, and the resulting output voltage when passed through a **limiter** with values $L_- = 0$ and $L_+ = 20$ V ($K=1$).



Note there are a couple of "hiccups" in the **input** voltage that take the voltage value **outside** the "safety" range of the sensitive device. However, the limiter does in fact **limit** these excursions, such that the voltage across the sensitive device **always** remains between 0 and 20 Volts.

Q: *Why would these "hiccups" occur?*

A: There are **many** possible reasons, including:

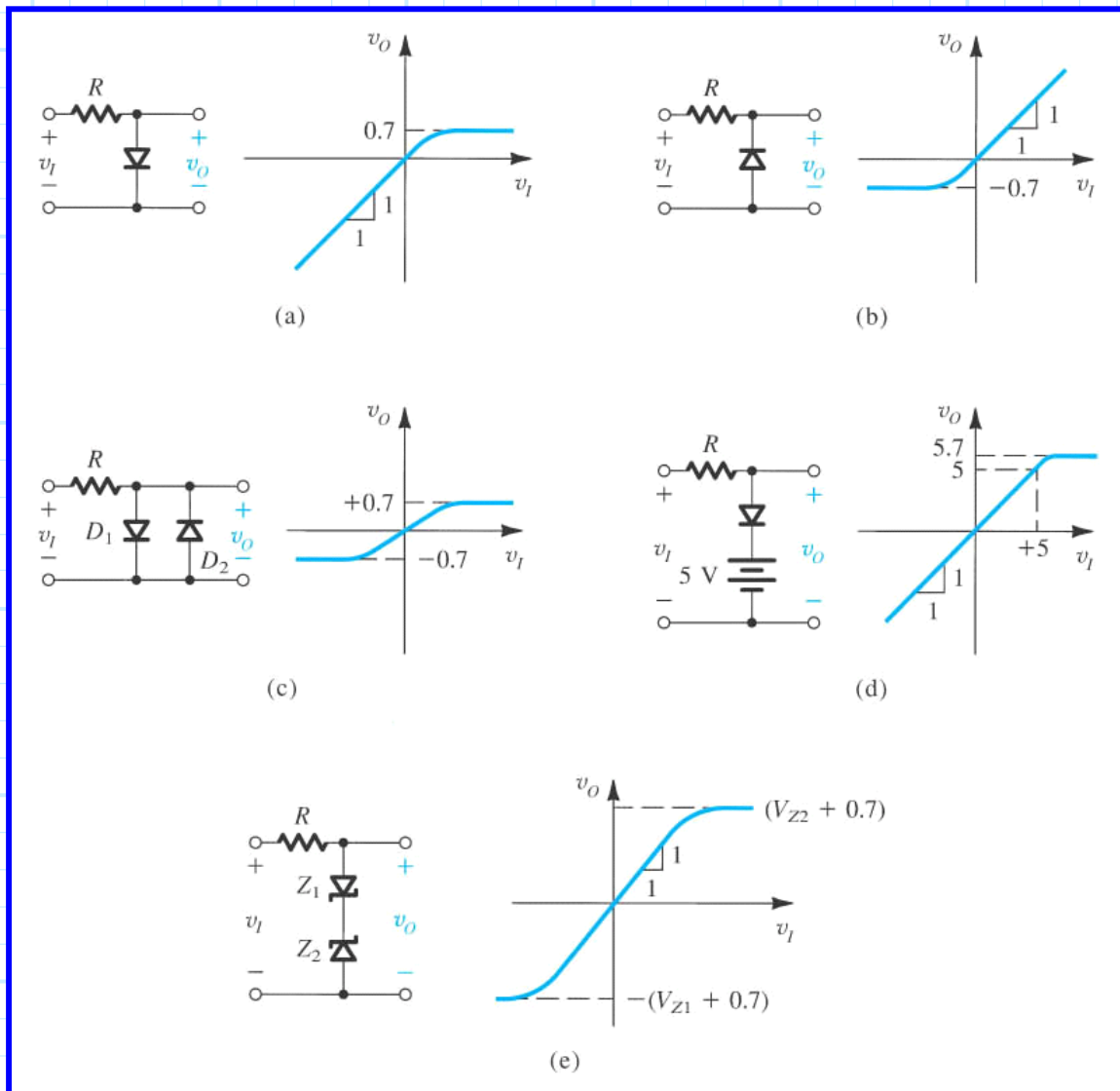
1. A power **surge** (e.g., lightning strike)
2. **Static** discharge
3. **Switching** transients (e.g., at power up or down).

Perhaps the most **prevalent** reason, however, is **operator error**.

→ Someone connects the **wrong** source to the sensitive device!

Thus, limiters are often used on expensive/sensitive devices to make them "**fool-proof**".

Your book has many **examples** of limiter circuits, including:



Steps for Analyzing Limiter Circuits

The junction diodes in most limiter circuits can/will be in forward bias, **or** reverse bias, **or** breakdown modes! Thus, the distinction between a Zener diode and a “normal” junction diode is essentially **meaningless**.

But, this presents us with a **big problem**—what diode **model** do we use to analyze a limiter? Recall that **none** of the diode models that we studied will provide accurate estimates for **all three** junction diode modes!

The **solution** we will use is to **change** the diode model we implement, as we consider **each** of the possible junction diode modes. Specifically:

Junction Diode Mode

Forward Bias

Reverse Bias

Breakdown

Junction Diode Model

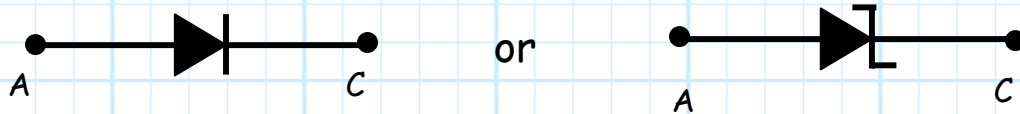
CVD model with ideal diode f.b.

Ideal diode model with ideal diode r.b

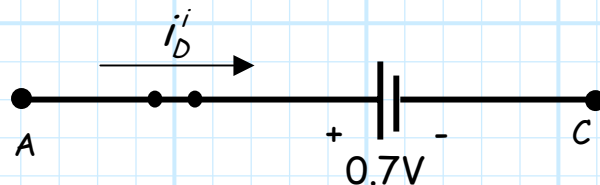
Zener CVD model with ideal diode f.b.

Step 1:

Assume that the limiter diode is **forward biased**, so replace



with a **CVD model**, where the **ideal diode is forward biased**:



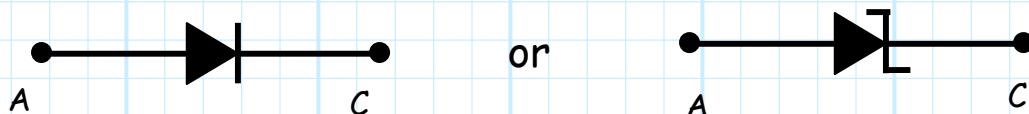
Now, using this model, **determine**:

1. The **output voltage** v_O in terms of input voltage v_I .
2. The **ideal diode current** i_D^i in terms of input voltage v_I .

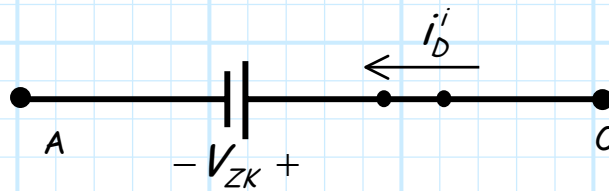
Finally, we solve the **inequality** $i_D^i > 0$ for v_I , thus determining **when** (i.e., for what values of v_I) this assumption, and thus the derived expression for output voltage v_O , is true.

Step 2:

Assume that the limiter diode is in **breakdown**, so replace



with a **Zener CVD model**, where the **ideal diode is forward biased**:



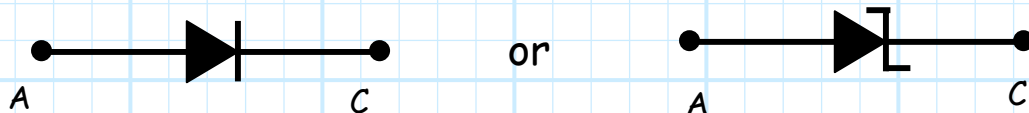
Now, using this model, **determine**:

1. The **output voltage** v_O in terms of input voltage v_I .
2. The **ideal diode current** i_D^i in terms of input voltage v_I .

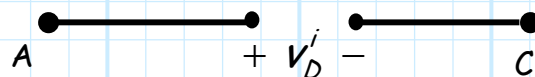
Finally, we solve the **inequality** $i_D^i > 0$ for v_I , thus determining **when** (i.e., for what values of v_I) this assumption, and thus the derived expression for output voltage v_O , is true.

Step 3:

Assume that the limiter diode is **reverse biased**, so replace



with an **Ideal Diode model**, where the ideal diode is **reversed biased**:



Now, using this model, determine the **output voltage** v_O in terms of input voltage v_I .

Q: *What about v_D^i ? Don't we need to likewise determine its value, and then determine **when** $v_D^i < 0$?*

A: Actually, **no**. If the junction diode is **not** forward biased and it is **not** in breakdown, then it **must** be reverse biased! As **obvious** as this statement is, we can use it determine **when** the junction diode is reverse biased—it's **when** the junction diode is **not** in forward bias **and when** it is **not** in reverse bias.

For **example**, say that we find that the junction diode is **forward biased** when:

$$v_I > 20 \text{ V},$$

and that the junction diode is in **breakdown** when:

$$v_I < -15 \text{ V}.$$

We can thus **conclude** that the junction diode is **reverse biased** when:

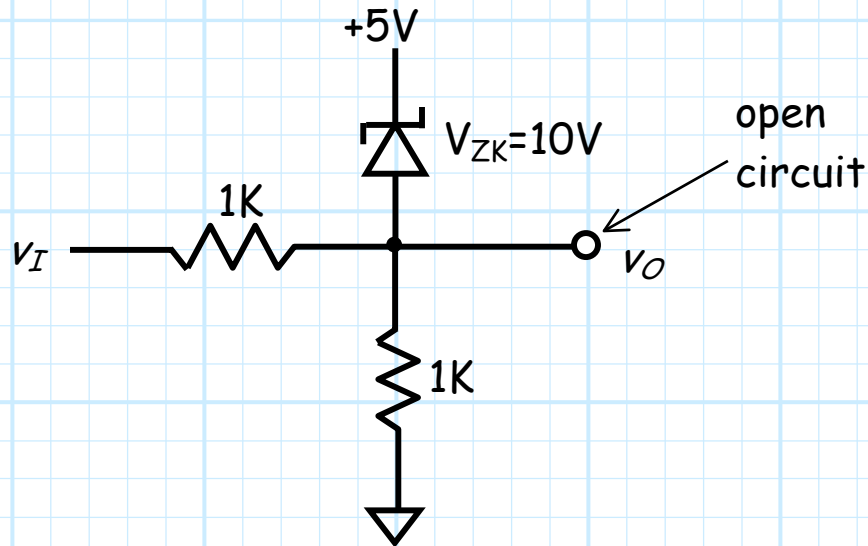
$$-15 \text{ V} < v_I < 20 \text{ V}$$

Step 4:

We take the result of the **previous 3 steps** and form a continuous, piecewise linear **transfer function** (make sure it's **continuous**, and that it's a **function!**).

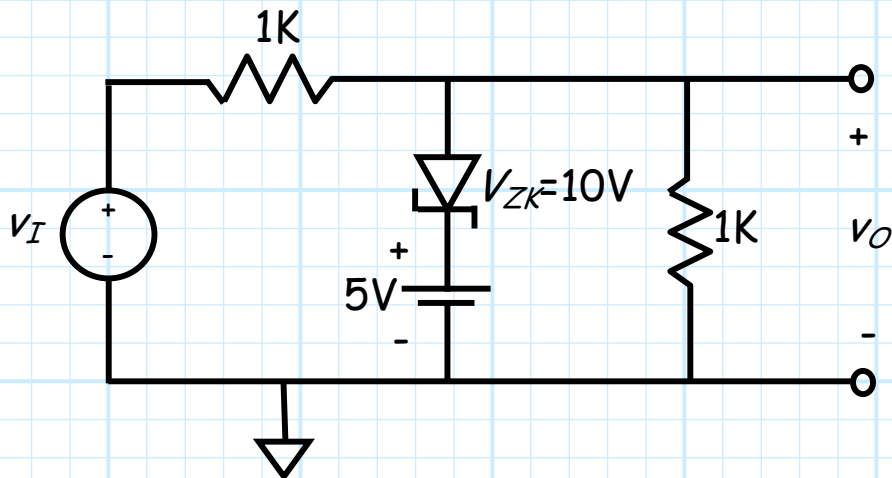
Example: A Diode Limiter

Consider the following **junction diode circuit**:



This circuit is a **junction diode limiter**!

Perhaps that would be clearer if we **redrew** this circuit as:

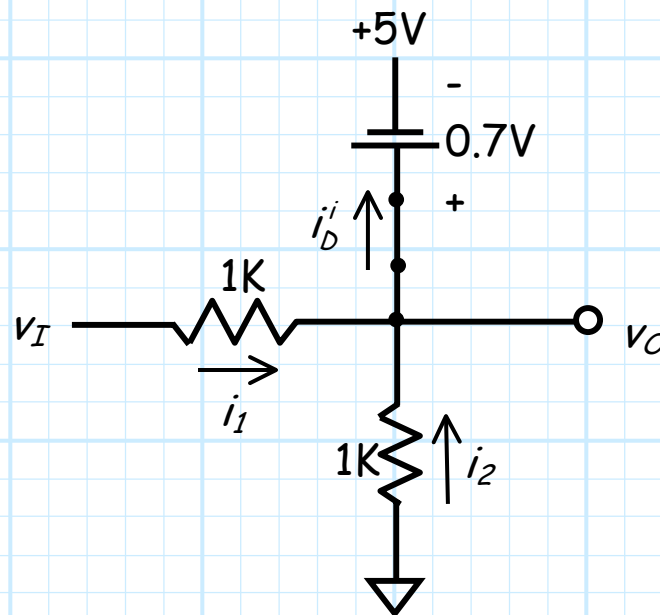


This is the **same** circuit as above!

Now, let's determine the **transfer function** of this limiter. To do this, we must follow the **4 steps** detailed in the previous handout!

Step 1: Assume junction diode is **forward biased**

Replace the junction diode with a **CVD model**. ASSUME the **ideal diode** is forward biased, ENFORCE $v_D' = 0$.



We find that the **output voltage** is simply:

$$v_o = 5.0 + 0.7 = 5.7 \text{ V}$$

while the **ideal** diode current is more difficult to determine.

From KCL:

$$i_D' = i_1 + i_2$$

where from Ohm's Law:

$$i_1 = \frac{v_I - 5.7}{1} = v_I - 5.7$$

and:

$$i_2 = \frac{0 - 5.7}{1} = -5.7$$

Thus, the **ideal** diode current is:

$$\begin{aligned} i_D^i &= i_1 + i_2 \\ &= v_I - 5.7 - 5.7 \\ &= v_I - 11.4 \end{aligned}$$

Now, for our assumption to be correct, this current must be **positive** (i.e., $i_D^i > 0$). Thus, we solve this **inequality** to determine **when** our assumption is true:

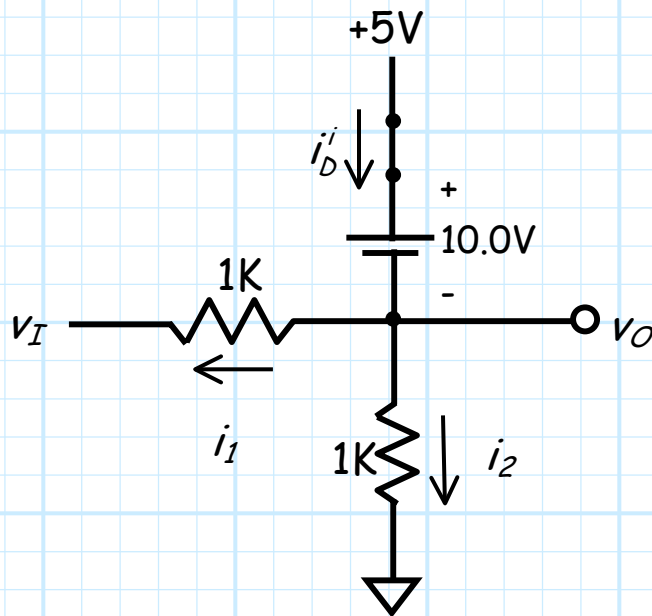
$$\begin{aligned} v_I - 11.4 &> 0 \\ v_I &> 11.4 \text{ V} \end{aligned}$$

So, from this step we find:

$$v_O = 5.7 \text{ V} \quad \text{when} \quad v_I > 11.4 \text{ V}$$

Step2: Assume the **junction** diode is in **breakdown**

Replace the junction diode with a **Zener CVD** model. **ASSUME** the **ideal** diode is forward biased, **ENFORCE** $v_D^i = 0$.



We find that the **output voltage** is simply:

$$v_o = 5 - 10 = -5.0V$$

while the **ideal** diode current is more difficult to determine.

From KCL:

$$i_D' = i_1 + i_2$$

where from Ohm's Law:

$$i_1 = \frac{-5 - v_I}{1} = -v_I - 5.0$$

and:

$$i_2 = \frac{0 - 5.0}{1} = -5.0V$$

Thus, the **ideal** diode current is:

$$\begin{aligned}
 i_D^i &= i_1 + i_2 \\
 &= -v_I - 5.0 - 5.0 \\
 &= -v_I - 10.0
 \end{aligned}$$

Now, for our assumption to be correct, this current must be **positive** (i.e., $i_D^i > 0$). Thus, we solve this **inequality** to determine **when** our assumption is true:

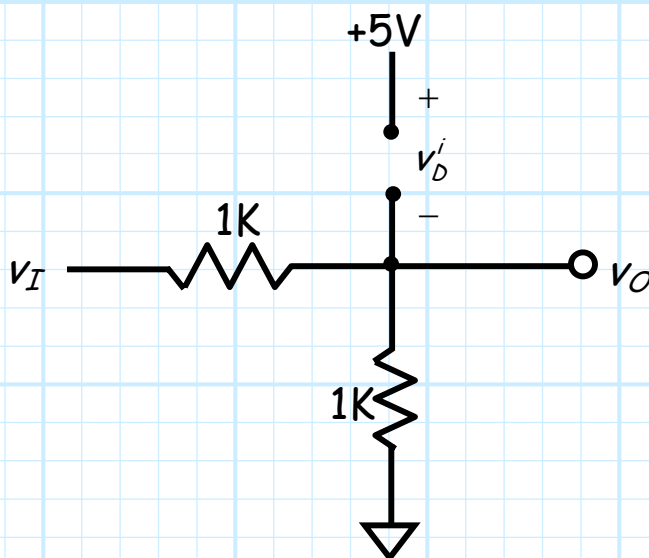
$$\begin{aligned}
 -v_I - 10.0 &> 0 \\
 -v_I &> 10.0 \text{ V} \\
 v_I &< -10.0 \text{ V}
 \end{aligned}$$

So, from this step we find:

$$v_O = -5.0 \text{ V} \quad \text{when} \quad v_I < -10.0 \text{ V}$$

Step 3: Assume the junction diode is **reverse** biased

Replace the junction diode with the **Ideal Diode** model.
ASSUME the **ideal** diode is **reverse** biased, ENFORCE $i_D^i = 0$.



A voltage divider!

Thus the **output voltage** is:

$$\begin{aligned} v_o &= \frac{v_I(1)}{1+1} \\ &= \frac{v_I}{2} \end{aligned}$$

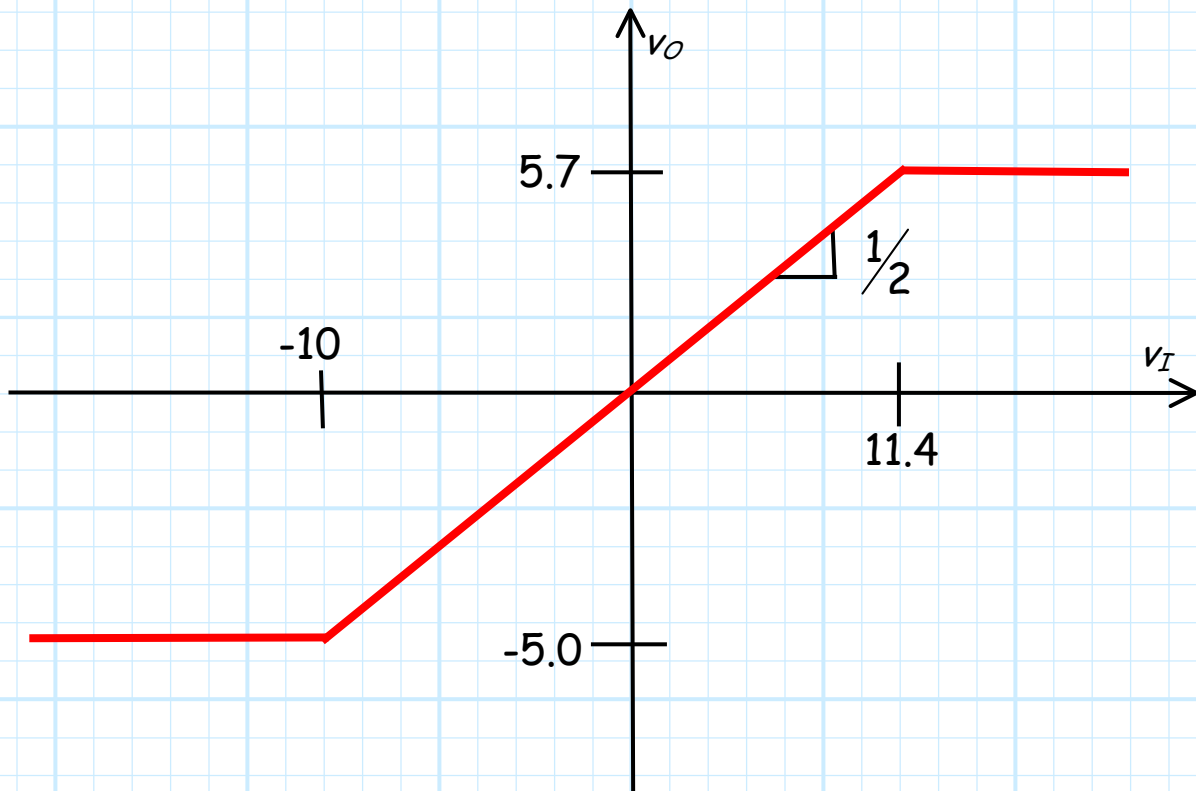
This output voltage is true **when** the junction diode is neither forward biased nor in breakdown. Thus, using the results from the first two steps, we can **infer** that it is true when:

$$-10.0 < v_I < 11.4$$

Step 4: Determine the continuous **transfer function**

Combining the results of the previous 3 steps, we get the following piece-wise linear **transfer function**:

$$v_o = \begin{cases} 5.7 \text{ V} & \text{if } v_I > 11.4 \text{ V} \\ v_I/2 & \text{if } -10.0 < v_I < 11.4 \text{ V} \\ -5.0 \text{ V} & \text{if } v_I < -10.0 \text{ V} \end{cases}$$



Note that at $v_I = -10$:

$$v_O = \frac{v_I}{2} = \frac{-10}{2} = -5.0 \text{ V}$$

and at $v_I = 11.4$:

$$v_O = \frac{v_I}{2} = \frac{11.4}{2} = 5.7 \text{ V}$$

Thus, this function is continuous!