

## 4.2 - Impedance and Admittance Matrices

**Reading Assignment:** pp. 170-174

A passive load is an example of a **1-port** device—only **one** transmission line is connected to it.

However, we often use devices with 2, 3, 4, or even more ports—**multiple** transmission lines can be attached to them!

**Q:** *But, we use impedance  $Z$ , admittance  $Y$ , or reflection coefficient  $\Gamma$  to **characterize** a load. How do we characterize a **multi-port** device?*

**A:** The analogy to  $Z$ ,  $Y$ , and  $\Gamma$  for a multi-port device is the **impedance matrix**, the **admittance matrix** and the **scattering matrix**.

**HO: THE IMPEDANCE MATRIX**

**HO: THE ADMITTANCE MATRIX**

We can determine **many** thing about a device by simply looking at the **elements** of the impedance and scattering matrix.

**HO: RECIPROCAL AND LOSSLESS DEVICES**

**Q:** *But how can we **determine**/measure the impedance and admittance matrix?*

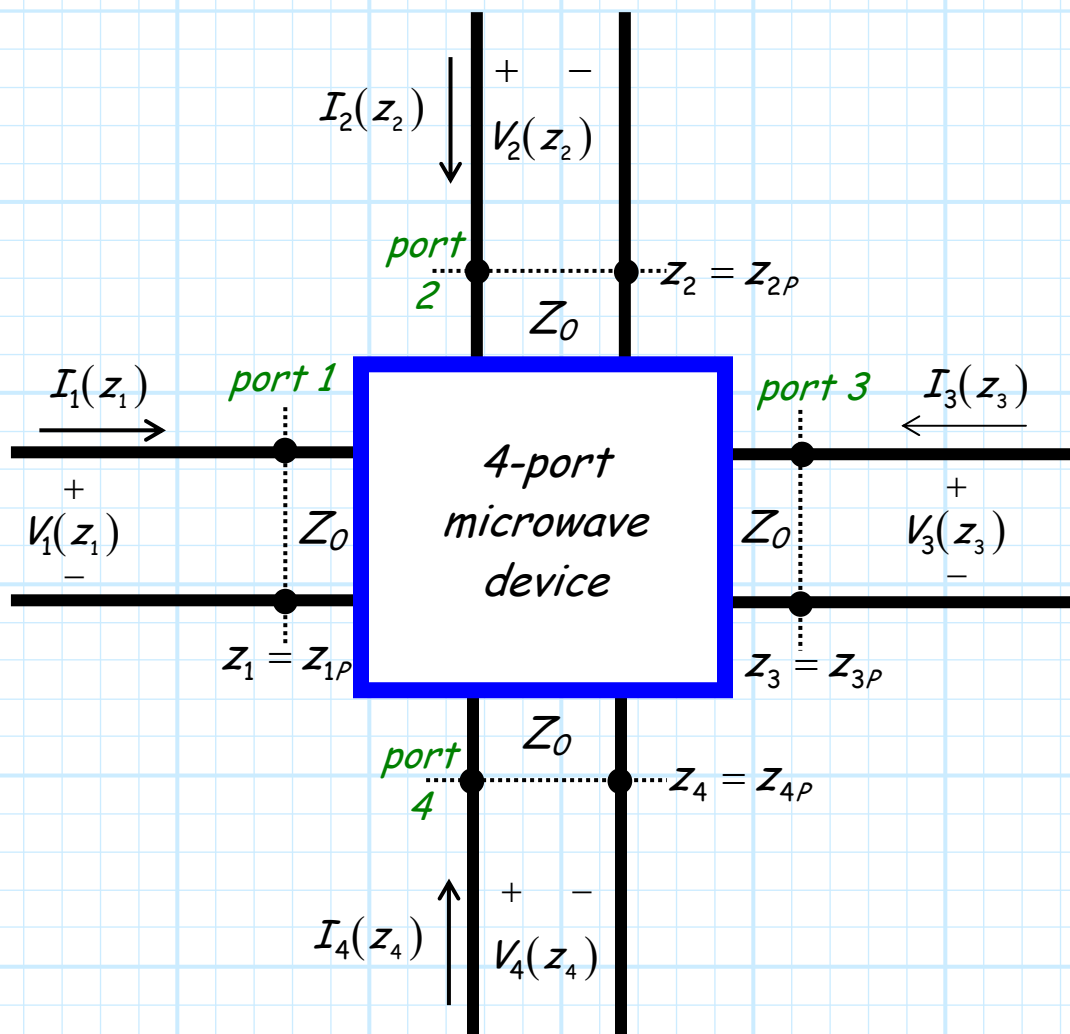
**A:** **EXAMPLE: EVALUATING THE ADMITTANCE MATRIX**

**Q:** *OK, but what are the impedance and admittance matrix good for? How can we **use** it to solve circuit problems?*

**A:** **EXAMPLE: USING THE IMPEDANCE MATRIX**

# The Impedance Matrix

Consider the **4-port** microwave device shown below:



Note in this example, there are four **identical** transmission lines connected to the same "box". Inside this box there may be a very **simple** linear device/circuit, or it might contain a very large and **complex** linear microwave system.

→ Either way, the "box" can be fully characterized by its **impedance matrix!**

First, note that each transmission line has a specific **location** that effectively defines the **input** to the device (i.e.,  $z_{1P}$ ,  $z_{2P}$ ,  $z_{3P}$ ,  $z_{4P}$ ). These often arbitrary positions are known as the **port locations**, or **port planes** of the device.

Thus, the **voltage** and **current** at port  $n$  is:

$$V_n(z_n = z_{nP}) \quad I_n(z_n = z_{nP})$$

We can **simplify** this cumbersome notation by simply **defining** port  $n$  current and voltage as  $I_n$  and  $V_n$ :

$$V_n = V_n(z_n = z_{nP}) \quad I_n = I_n(z_n = z_{nP})$$

For **example**, the current at port **3** would be  $I_3 = I_3(z_3 = z_{3P})$ .

Now, say there exists a non-zero current at **port 1** (i.e.,  $I_1 \neq 0$ ), while the current at all **other** ports are known to be **zero** (i.e.,  $I_2 = I_3 = I_4 = 0$ ).

Say we measure/determine the **current** at port **1** (i.e., determine  $I_1$ ), and we then measure/determine the **voltage** at the port **2** plane (i.e., determine  $V_2$ ).

The complex ratio between  $V_2$  and  $I_1$  is known as the **trans-impedance parameter**  $Z_{21}$ :

$$Z_{21} = \frac{V_2}{I_1}$$

Likewise, the trans-impedance parameters  $Z_{31}$  and  $Z_{41}$  are:

$$Z_{31} = \frac{V_3}{I_1} \quad \text{and} \quad Z_{41} = \frac{V_4}{I_1}$$

We of course could **also** define, say, trans-impedance parameter  $Z_{34}$  as the ratio between the complex values  $I_4$  (the current into port 4) and  $V_3$  (the voltage at port 3), given that the current at all other ports (1, 2, and 3) are zero.

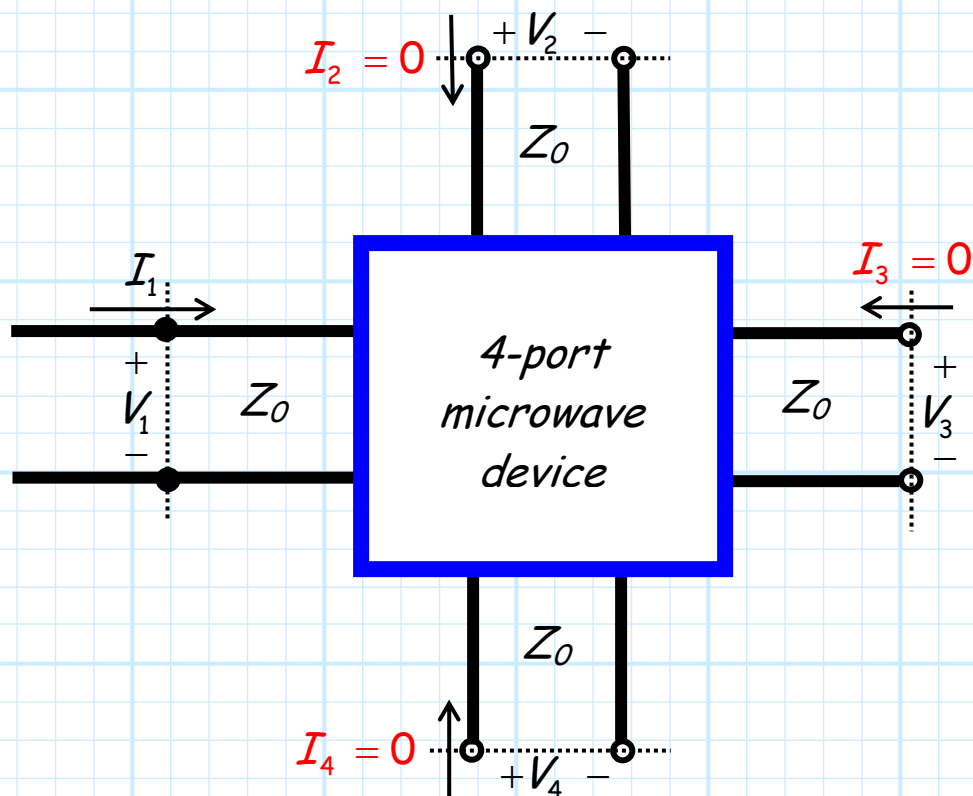
Thus, more **generally**, the ratio of the current into port  $n$  and the voltage at port  $m$  is:

$$Z_{mn} = \frac{V_m}{I_n} \quad (\text{given that } I_k = 0 \text{ for all } k \neq n)$$

**Q:** *But how do we ensure that all but one port current is zero?*




**A:** Place an **open circuit** at those ports!



Placing an **open** at a port (and it must be **at the port!**) enforces the condition that  $I = 0$ .

Now, we can thus **equivalently** state the definition of trans-impedance as:

$$Z_{mn} = \frac{V_m}{I_n} \quad (\text{given that all ports } k \neq n \text{ are open})$$



**Q:** *As impossible as it sounds, this handout is even more **boring** and **pointless** than any of your previous efforts. **Why** are we studying this? After all, what is the likelihood that a device will have an **open** circuit on **all** but one of its ports?!*

**A:** OK, say that **none** of our ports are **open-circuited**, such that we have currents **simultaneously** on **each** of the **four** ports of our device.

Since the device is **linear**, the voltage at any **one** port due to **all** the port currents is simply the coherent **sum** of the voltage at that port due to **each** of the currents!

For example, the voltage at port 3 can be determined by:

$$V_3 = Z_{34} I_4 + Z_{33} I_3 + Z_{32} I_2 + Z_{31} I_1$$

More generally, the voltage at port  $m$  of an  $N$ -port device is:

$$V_m = \sum_{n=1}^N Z_{mn} I_n$$

This expression can be written in **matrix** form as:

$$\mathbf{V} = \mathbf{Z} \mathbf{I}$$

Where  $\mathbf{I}$  is the **vector**:

$$\mathbf{I} = [I_1, I_2, I_3, \dots, I_N]^T$$

and  $\mathbf{V}$  is the vector:

$$\mathbf{V} = [V_1, V_2, V_3, \dots, V_N]^T$$

And the matrix  $\mathbf{Z}$  is called the **impedance matrix**:

$$\mathbf{Z} = \begin{bmatrix} Z_{11} & \dots & Z_{1n} \\ \vdots & \ddots & \vdots \\ Z_{m1} & \dots & Z_{mn} \end{bmatrix}$$

The impedance matrix is a  $N$  by  $N$  matrix that **completely characterizes** a linear,  $N$ -port device. Effectively, the impedance matrix describes a multi-port device the way that  $Z_L$  describes a single-port device (e.g., a load)!



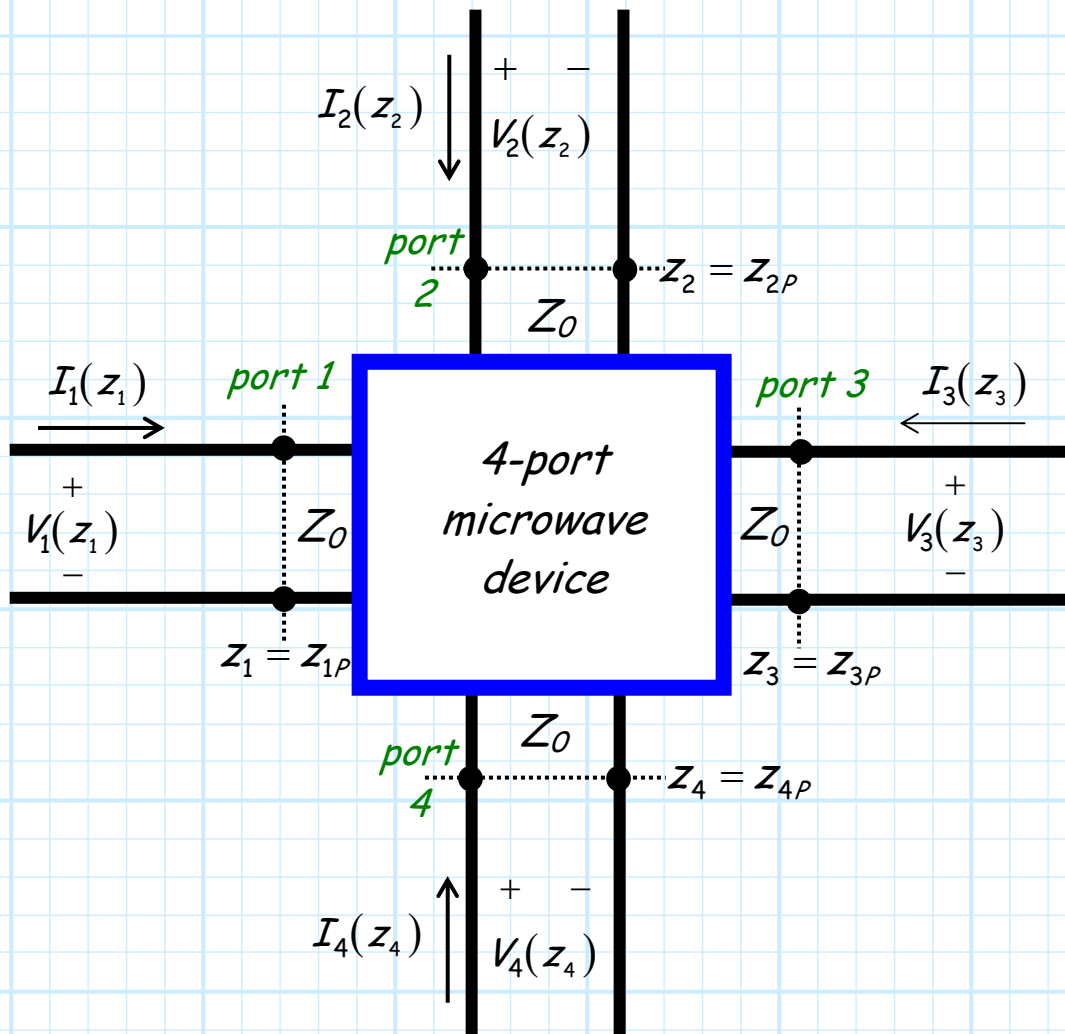


But **beware!** The values of the impedance matrix for a particular device or network, just like  $Z_L$ , are **frequency dependent!** Thus, it may be more instructive to **explicitly** write:

$$\mathbf{Z}(\omega) = \begin{bmatrix} Z_{11}(\omega) & \cdots & Z_{1n}(\omega) \\ \vdots & \ddots & \vdots \\ Z_{m1}(\omega) & \cdots & Z_{mn}(\omega) \end{bmatrix}$$

# The Admittance Matrix

Consider again the 4-port microwave device shown below:

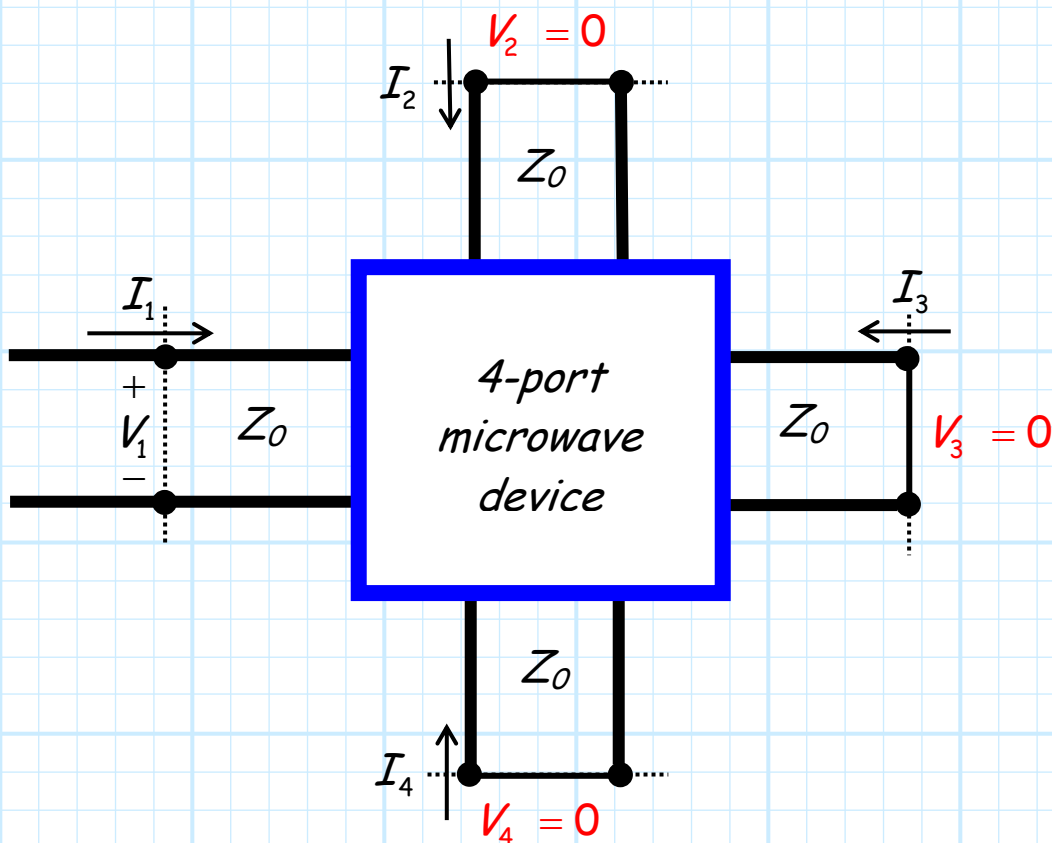


In addition to the Impedance Matrix, we can fully characterize this linear device using the **Admittance Matrix**.

The elements of the Admittance Matrix are the **trans-admittance** parameters  $Y_{mn}$ , defined as:

$$y_{mn} = \frac{I_m}{V_n} \quad (\text{given that } V_k = 0 \text{ for all } k \neq n)$$

Note here that the **voltage** at all but one port **must** be equal to **zero**. We can ensure that by simply placing a **short circuit** at these zero voltage ports!



Note that  $y_{mn} \neq 1/Z_{mn}$ !

Now, we can thus **equivalently** state the definition of trans-admittance as:

$$Y_{mn} = \frac{I_m}{V_n} \quad (\text{given that all ports } k \neq n \text{ are short-circuited})$$

Just as with the trans-impedance values, we can use the trans-admittance values to evaluate general circuit problems, where **none** of the ports have zero voltage.

Since the device is **linear**, the current at any **one** port due to **all** the port currents is simply the coherent **sum** of the currents at that port due to **each** of the port voltages!

For example, the **current** at port 3 can be determined by:

$$I_3 = Y_{34} V_4 + Y_{33} V_3 + Y_{32} V_2 + Y_{31} V_1$$

More **generally**, the current at port  $m$  of an  $N$ -port device is:

$$I_m = \sum_{n=1}^N y_{mn} V_n$$

This expression can be written in **matrix** form as:

$$\mathbf{I} = \mathcal{Y} \mathbf{V}$$

Where  $\mathbf{I}$  is the **vector**:

$$\mathbf{I} = [I_1, I_2, I_3, \dots, I_N]^T$$

and  $\mathbf{V}$  is the **vector**:

$$\mathbf{V} = [V_1, V_2, V_3, \dots, V_N]^T$$

And the matrix  $\mathcal{Y}$  is called the **admittance matrix**:

$$\mathcal{Y} = \begin{bmatrix} Y_{11} & \dots & Y_{1n} \\ \vdots & \ddots & \vdots \\ Y_{m1} & \dots & Y_{mn} \end{bmatrix}$$

The admittance matrix is a  $N$  by  $N$  matrix that **completely characterizes** a linear,  $N$ -port device. Effectively, the admittance matrix describes a multi-port device the way that  $Y_L$  describes a single-port device (e.g., a load)!



But **beware!** The values of the admittance matrix for a particular device or network, just like  $Y_L$ , are **frequency dependent!** Thus, it may be more instructive to **explicitly** write:

$$\mathcal{Y}(\omega) = \begin{bmatrix} Y_{11}(\omega) & \dots & Y_{1n}(\omega) \\ \vdots & \ddots & \vdots \\ Y_{m1}(\omega) & \dots & Y_{mn}(\omega) \end{bmatrix}$$

**Q:** You said earlier that  $Y_{mn} \neq 1/Z_{mn}$ . Is there any **relationship** between the admittance and impedance matrix of a given device?

**A:** I don't know! Let's see if **we** can figure it out.

Recall that we can determine the inverse of a matrix. Denoting the matrix inverse of the admittance matrix as  $\mathcal{Y}^{-1}$ , we find:

$$\mathbf{I} = \mathcal{Y} \mathbf{V}$$

$$\mathcal{Y}^{-1} \mathbf{I} = \mathcal{Y}^{-1} (\mathcal{Y} \mathbf{V})$$

$$\mathcal{Y}^{-1} \mathbf{I} = (\mathcal{Y}^{-1} \mathcal{Y}) \mathbf{V}$$

$$\mathcal{Y}^{-1} \mathbf{I} = \mathbf{V}$$

Meaning that:

$$\mathbf{V} = \mathcal{Y}^{-1} \mathbf{I}$$

But, we likewise know that:

$$\mathbf{V} = \mathcal{Z} \mathbf{I}$$

By comparing the two previous expressions, we can conclude:

$$\mathcal{Z} = \mathcal{Y}^{-1} \quad \text{and} \quad \mathcal{Z}^{-1} = \mathcal{Y}$$

# Reciprocal and Lossless Networks

We can **classify** multi-port devices or networks as either **lossless** or **lossy**; **reciprocal** or **non-reciprocal**. Let's look at each classification individually:

## Lossless

A **lossless** network or device is simply one that **cannot** absorb power. This does **not** mean that the delivered power at **every port** is zero; rather, it means the total power flowing **into** the **device** must equal the total power **exiting** the **device**.

A lossless device exhibits an impedance matrix with an interesting **property**. Perhaps not surprisingly, we find for a lossless device that the **elements** of its impedance matrix will be **purely reactive**:

$$\operatorname{Re}\{Z_{mn}\} = 0 \quad \text{for a lossless device.}$$

If the device is **lossy**, then the elements of the impedance matrix must have **at least** one element with a real (i.e., resistive) component.

Moreover, we similarly find that if the elements of an **admittance** matrix are **all** purely imaginary (i.e.,  $Re\{Y_{mn}\} = 0$ ), then the device is lossless.

## Reciprocal

Generally speaking, most **passive, linear** microwave components will turn out to be **reciprocal**—regardless of whether the designer **intended** it to be or not!

Reciprocity is basically a “natural” effect of using simple linear materials such as **dielectrics** and **conductors**. It results from a characteristic in **electromagnetics** called “reciprocity”—a characteristic that is difficult to **prevent!**

But reciprocity is a tremendously important characteristic, as it greatly **simplifies** an impedance or admittance matrix!

Specifically, we find that a reciprocal device will result in a **symmetric** impedance and admittance **matrix**, meaning that:

$$Z_{mn} = Z_{nm} \quad Y_{mn} = Y_{nm} \quad \text{for reciprocal devices}$$

For **example**, we find for a reciprocal device that  $Z_{23} = Z_{32}$ , and  $Y_{21} = Y_{12}$ .



Let's illustrate these concepts with **four examples**:

$$\mathbf{Z} = \begin{bmatrix} j2 & 0.1 & j3 \\ -j & -1 & 1 \\ 4 & -2 & 0.5 \end{bmatrix}$$

**Neither lossless nor reciprocal.**

$$\mathbf{Z} = \begin{bmatrix} j2 & j0.1 & j3 \\ -j & -j1 & j1 \\ j4 & -j2 & j0.5 \end{bmatrix}$$

**Lossless, but not reciprocal.**

$$\mathbf{Z} = \begin{bmatrix} j2 & -j & 4 \\ -j & -1 & -j2 \\ 4 & -j2 & j0.5 \end{bmatrix}$$

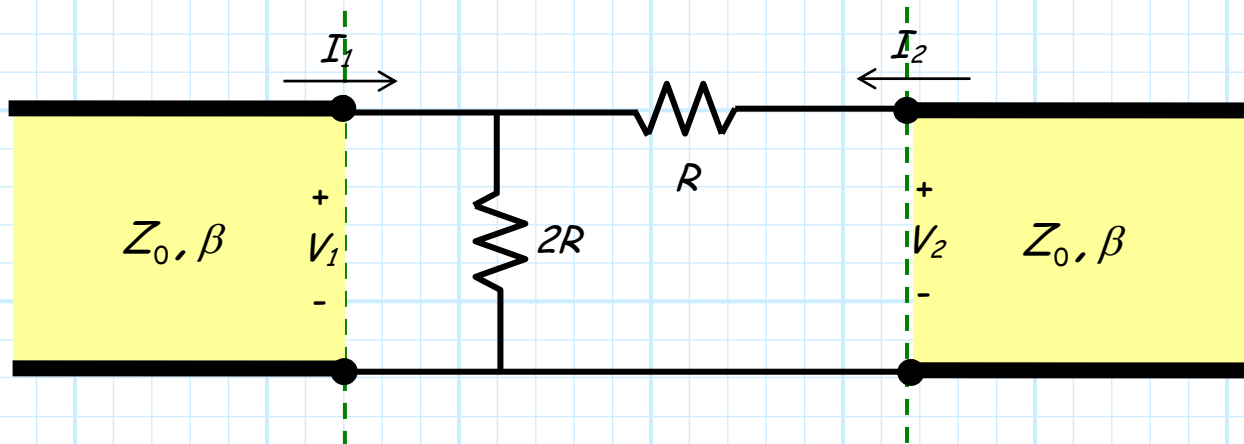
**Reciprocal, but not lossless.**

$$\mathbf{Z} = \begin{bmatrix} j2 & -j & j4 \\ -j & -j & -j2 \\ j4 & -j2 & j0.5 \end{bmatrix}$$

**Both reciprocal and lossless.**

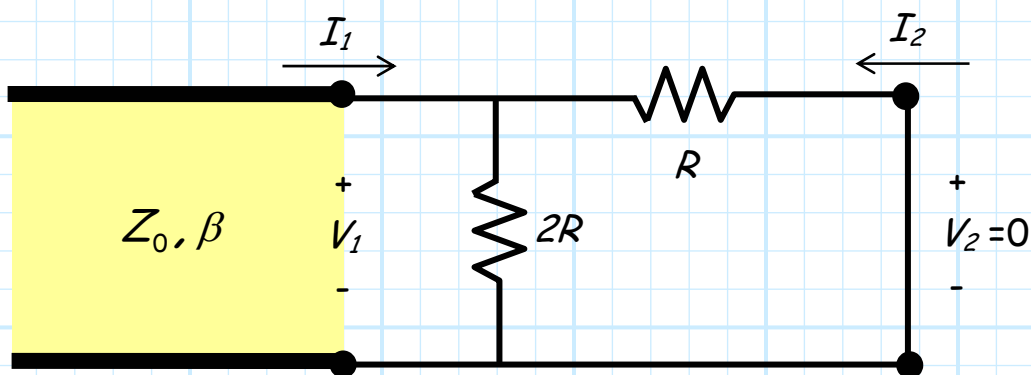
# Example: Evaluating the Admittance Matrix

Consider the following two-port device:



Let's determine the **admittance matrix** of this device!

**Step 1:** Place a **short** at port 2.



**Step 2:** Determine currents  $I_1$  and  $I_2$ .

Note that **after** the short was placed at port 2, both resistors are in **parallel**, with a potential  $V_2$  across each.

The current  $I_1$  is thus simply the **sum** of the two currents through **each** resistor:

$$I_1 = \frac{V_1}{2R} + \frac{V_1}{R} = \frac{3V_1}{2R}$$

The current  $I_2$  is simply the **opposite** of the current through  $R$ :

$$I_2 = -\frac{V_1}{R}$$

**Step 3:** Determine trans-admittance  $Y_{11}$  and  $Y_{21}$ .

$$Y_{11} = \frac{I_1}{V_1} = \frac{3}{2R}$$

$$Y_{21} = \frac{I_2}{V_1} = -\frac{1}{R}$$

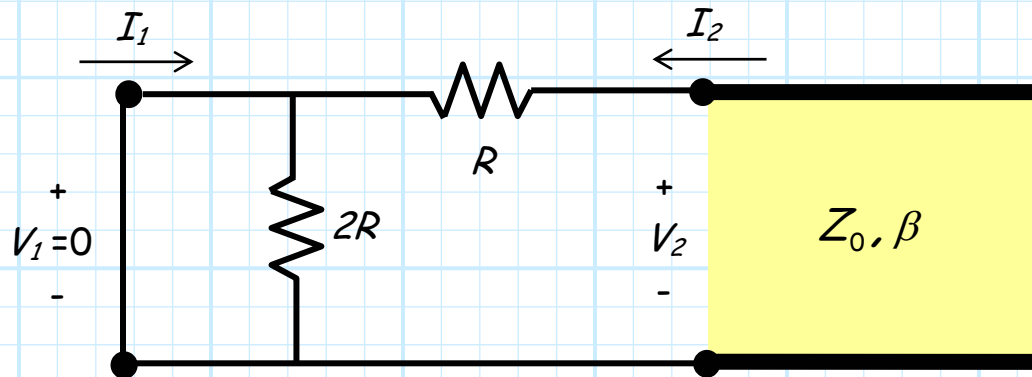


Note that  $Y_{21}$  is **real**—but **negative**!

This is **still** a valid physical result, **although** you will find that the **diagonal** terms of an impedance or admittance matrix (e.g.,  $Y_{22}$ ,  $Z_{11}$ ,  $Y_{44}$ ) will **always** have a real component that is **positive**.

To find the **other two** trans-admittance parameters, we must **move** the short and then **repeat** each of our previous steps!

**Step 1:** Place a short at port 1.



**Step 2:** Determine currents  $I_1$  and  $I_2$ .

Note that **after** a short was placed at port 1, resistor  $2R$  has **zero** voltage across it—and thus **zero** current through it!

Likewise, from KVL we find that the **voltage** across resistor  $R$  is equal to  $V_2$ .

Finally, we see from KCL that  $I_1 = I_2$ .

The current  $I_2$  thus:

$$I_2 = \frac{V_2}{R}$$

and thus:

$$I_1 = -\frac{V_2}{R}$$

**Step 3:** Determine trans-admittance  $Y_{12}$  and  $Y_{22}$ .

$$Y_{12} = \frac{I_1}{V_2} = -\frac{1}{R}$$

$$Y_{22} = \frac{I_2}{V_2} = \frac{1}{R}$$

The **admittance** matrix of this two-port device is therefore:

$$\mathbf{y} = \frac{1}{R} \begin{bmatrix} 1.5 & -1 \\ -1 & 1 \end{bmatrix}$$

Note this device (as **you** may have suspected) is **lossy** and **reciprocal**.

**Q:** *What about the **impedance** matrix? How can we determine that?*

**A:** One way is simply determine the **inverse** of the admittance matrix above.

$$\begin{aligned} \mathbf{z} &= \mathbf{y}^{-1} \\ &= R \begin{bmatrix} 1.5 & -1 \\ -1 & 1 \end{bmatrix}^{-1} \\ &= R \begin{bmatrix} 2 & 2 \\ 2 & 3 \end{bmatrix} \end{aligned}$$



**Q:** *But I don't know how to **invert** a matrix! How can I **possibly** pass one of your long, scary, evil exams?*

**A:** **Another** way to determine the impedance matrix is simply to apply the **definition** of trans-impedance to **directly** determine the elements of the impedance matrix—**similar** to how we just determined the admittance matrix!

Specifically, follow these **steps**:

**Step 1:** Place an **open** at port 2 (or 1)

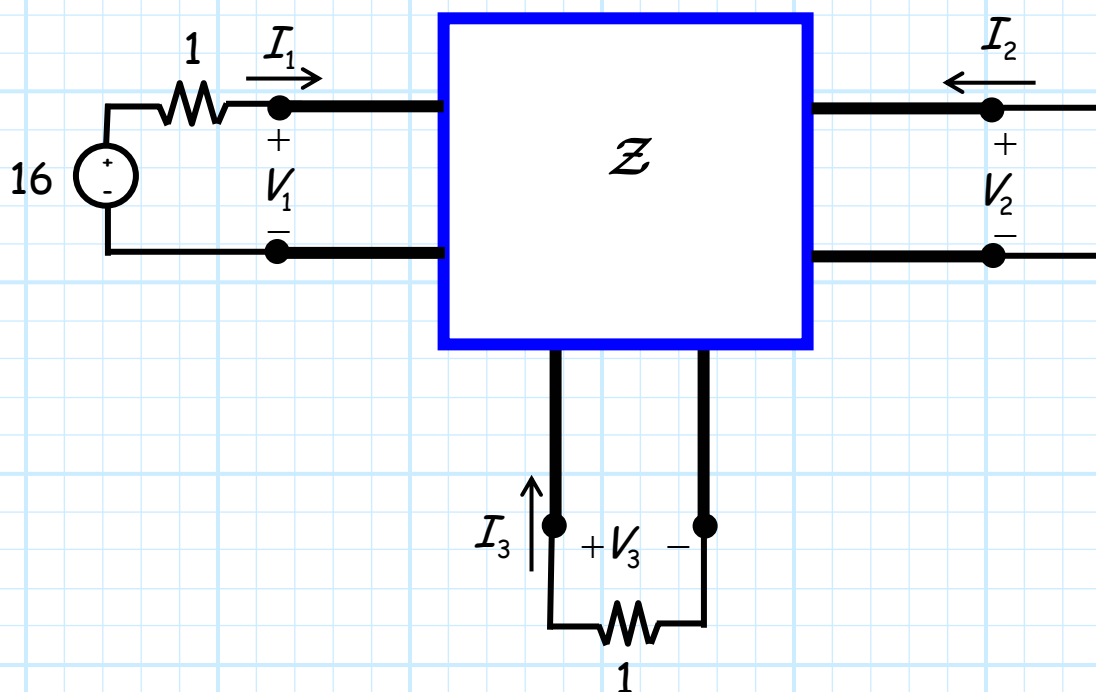
**Step 2:** Determine **voltages**  $V_1$  and  $V_2$ .

**Step 3:** Determine trans-**impedance**  $Z_{11}$  and  $Z_{21}$  (or  $Z_{12}$  and  $Z_{22}$  ).

You try this procedure on the circuit of this example, and make sure **you** get the **same** result for  $\mathcal{Z}$  as we determined on the previous page (from matrix inversion)—after all, **you** want to do **well** on my long, scary, evil **exam**!

# Example: Using the Impedance Matrix

Consider the following circuit:



Where the 3-port **device** is characterized by the **impedance matrix**:

$$\mathbf{Z} = \begin{bmatrix} 2 & 1 & 2 \\ 1 & 1 & 4 \\ 2 & 4 & 1 \end{bmatrix}$$

Let's now determine all port **voltages**  $V_1, V_2, V_3$  and all **currents**  $I_1, I_2, I_3$ .



**Q:** *How can we do that—we **don't** know what the device is made of! What's inside that box?*

**A:** We **don't** need to know what's inside that box! We know its impedance matrix, and that **completely** characterizes the device (or, at least, characterizes it at **one** frequency).

Thus, we have enough information to solve this problem. From the impedance matrix we know:

$$V_1 = 2 I_1 + I_2 + 2 I_3$$

$$V_2 = I_1 + I_2 + 4 I_3$$

$$V_3 = 2 I_1 + 4 I_2 + I_3$$



**Q:** *Wait! There are only **3** equations here, yet there are **6** unknowns!?*

**A:** True! The impedance matrix describes the device in the box, but it does **not** describe the devices **attached** to it. We require **more** equations to describe them.



1. The **source** at port 1 is described by the equation:

$$V_1 = 16.0 - (1)I_1$$

2. The **short** circuit on port 2 means that:

$$V_2 = 0$$

3. While the **load** on port 3 leads to:

$$V_3 = -(1)I_3 \quad (\text{note the minus sign!})$$

Now we have **6** equations and **6** unknowns! Combining equations, we find:

$$V_1 = 16 - I_1 = 2I_1 + I_2 + 2I_3$$

$$\therefore 16 = 3I_1 + I_2 + 2I_3$$

$$V_2 = 0 = I_1 + I_2 + 4I_3$$

$$\therefore 0 = I_1 + I_2 + 4I_3$$

$$V_3 = -I_3 = 2I_1 + 4I_2 + I_3$$

$$\therefore 0 = 2I_1 + 4I_2 + 2I_3$$

**Solving**, we find (I'll let you do the algebraic details!):

$$I_1 = 7.0$$

$$I_2 = -3.0$$

$$I_3 = -1.0$$

$$V_1 = 9.0$$

$$V_2 = 0.0$$

$$V_3 = 1.0$$